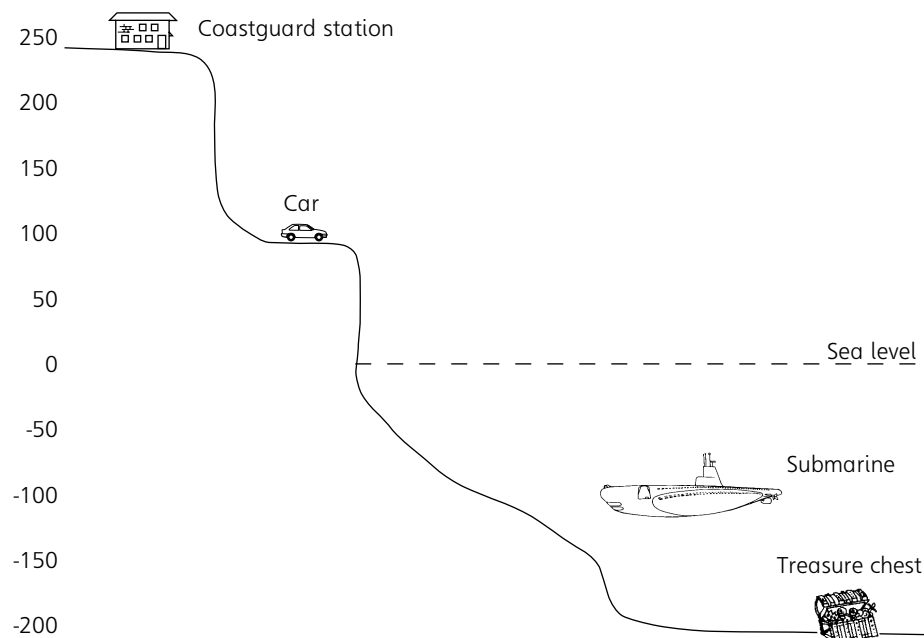


3 Negative numbers – 1

1 The picture shows the heights, in metres, of several objects.



Give the difference in height between the following:

- a coastguard station and submarine
- b submarine and treasure chest
- c car and treasure chest
- d coastguard station and treasure chest
- e car and submarine
- f coastguard station and car

- 1a ☐
- b ☐
- c ☐
- d ☐
- e ☐
- f ☐

2 Place these numbers in order, smallest first:

- a -5, 3, -7, 1, 6
- b 4, -2, -6, -8, 3
- c 5, 0, -2, -6, 7

- 2a ☐
- b ☐
- c ☐

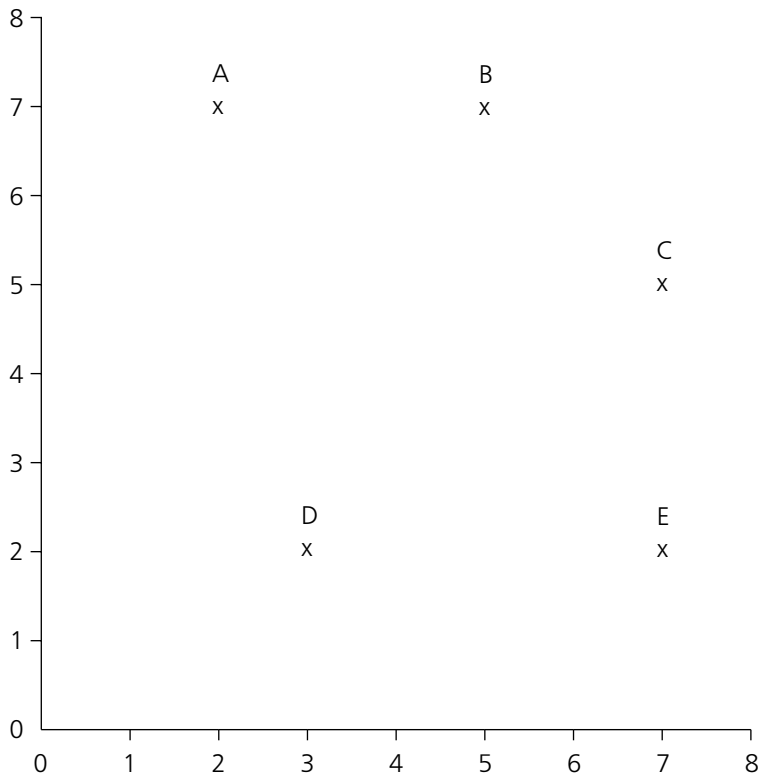
3 Work out the answers to these questions:

- a $-3 - 5$
- b $-4 + 6$
- c $3 - 5$

- 3a ☐
- b ☐
- c ☐

56 Coordinates

1 Give the coordinates of the points shown.



A=..... ☐

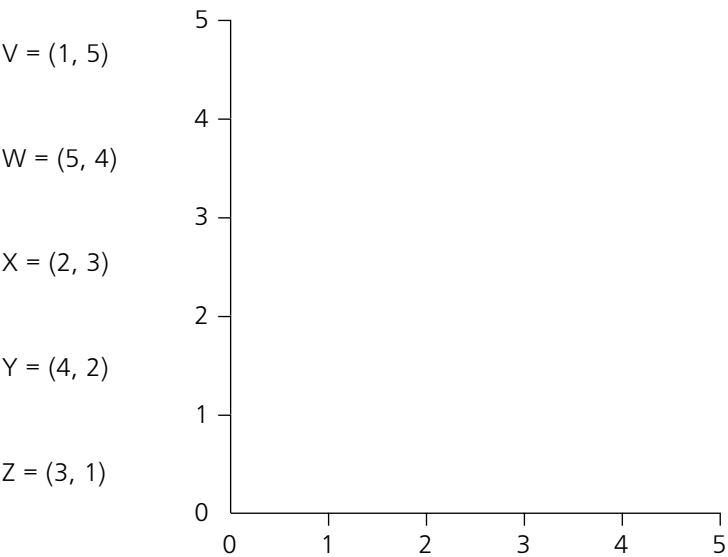
B=..... ☐

C=..... ☐

D=..... ☐

E=..... ☐

Mark these points on the graph:



V ☐

W ☐

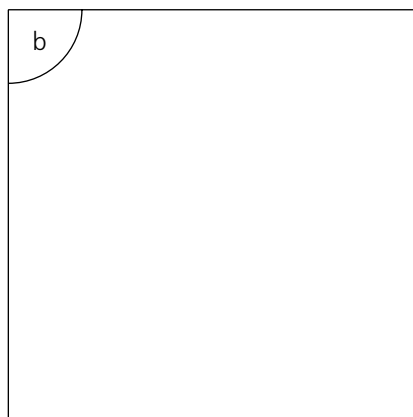
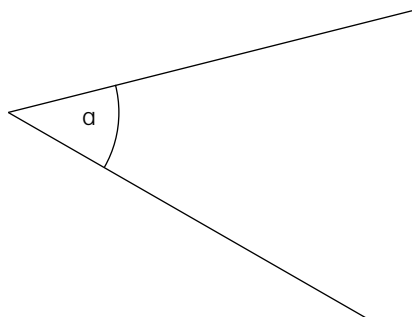
X ☐

Y ☐

Z ☐

63 Angles – 1

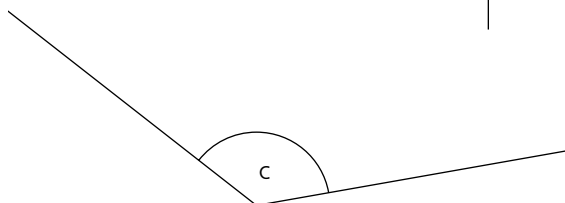
Give the special names of these angles:



a..... ☐

b..... ☐

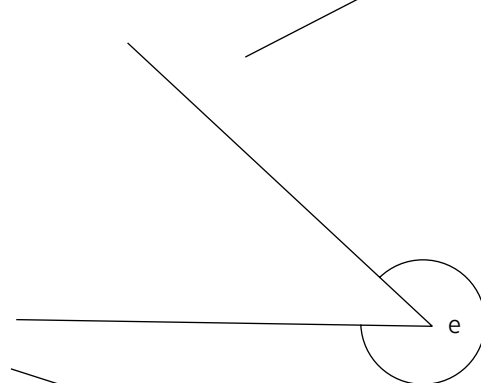
c..... ☐



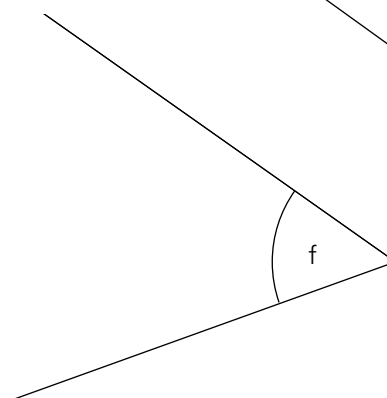
d..... ☐



e..... ☐



f..... ☐



g..... ☐

h..... ☐

