

38 Number-writing Race Game

This sheet is a 'blank' for use with a single-numbered dice. The game is played as above, except that the figure thrown is written in the box. Write the number to be used on the dice, as the 2 in *Figure 3* below. The game can be played with a conventionally numbered or spotted dice to practise all the figures from 1 to 6.


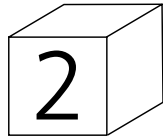


Figure 3

39 The Toadstool and Ladybird Games

These are played as above but this time dots are drawn on the toadstools or ladybirds. The sheet should be cut into two strips and can be reduced in size for older pupils. Pupils should be shown how an odd number can be placed symmetrically on a ladybird (see *Figure 4*).

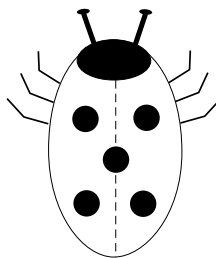


Figure 4

Worksheets 40 to 50

These sheets are designed to be made into reusable materials (see the notes on page 6). They can be copied, cut up and pasted into exercise books or sent home as homework.

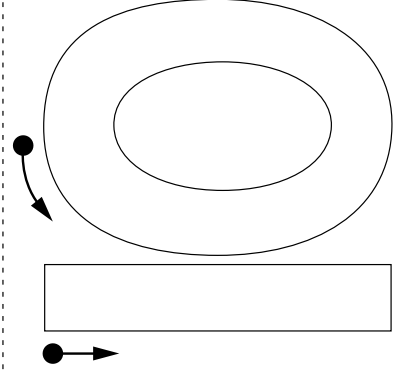
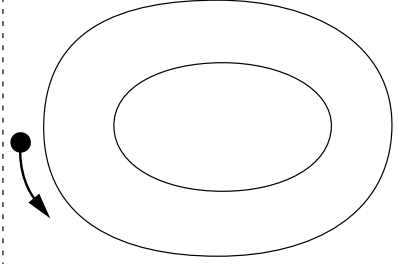
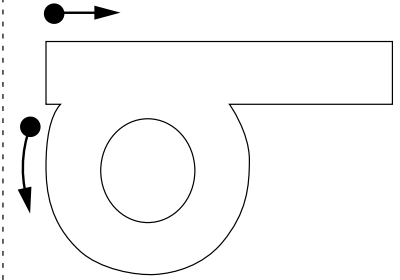

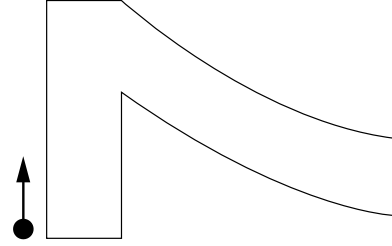
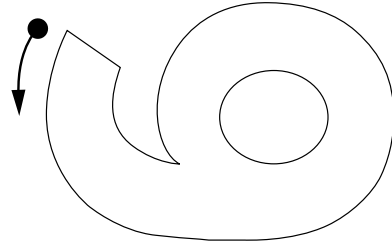

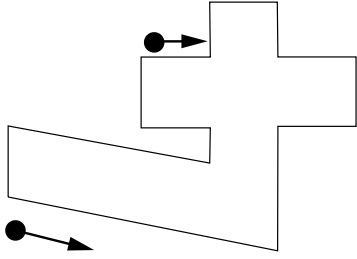

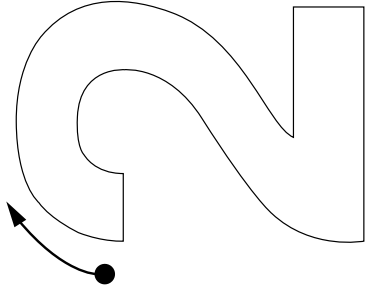
Worksheets 51 to 53 Graded Shapes

These graded shapes are all used in a similar way. For use by individual pupils, cut the sheets in half. The shapes can then be decorated, cut out and arranged in order of size before being pasted onto paper or into an exercise book. Two pupils can work together.

To make a wall frieze, enlarge the sheet from A4 to A3, decorate, order the shapes as above, and arrange on a piece of coloured paper. The squares and triangles should not all be placed 'square' on the paper, but should be in different orientations. Numbers can be written on the shapes.

Large Numbers to Write


Start at the blob at the end of the arrow each time.




Counting and Adding 5

Write the numbers on the lines

_____ little rectangles




_____ big rectangles




_____ rectangles altogether

Write the numbers on the lines

_____ little triangles



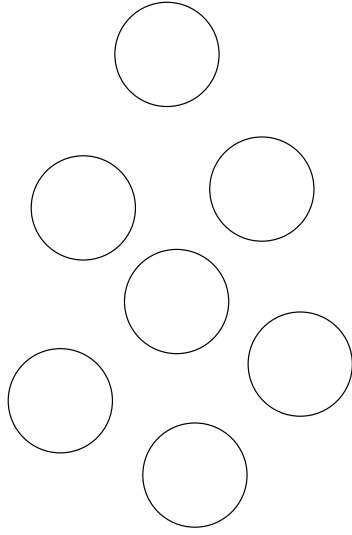
_____ big triangles



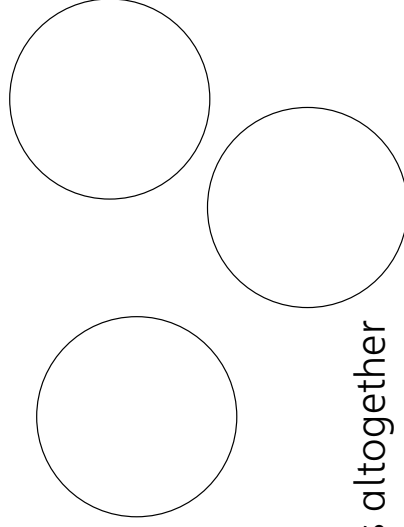
_____ triangles altogether

Write the numbers on the lines

_____ little circles

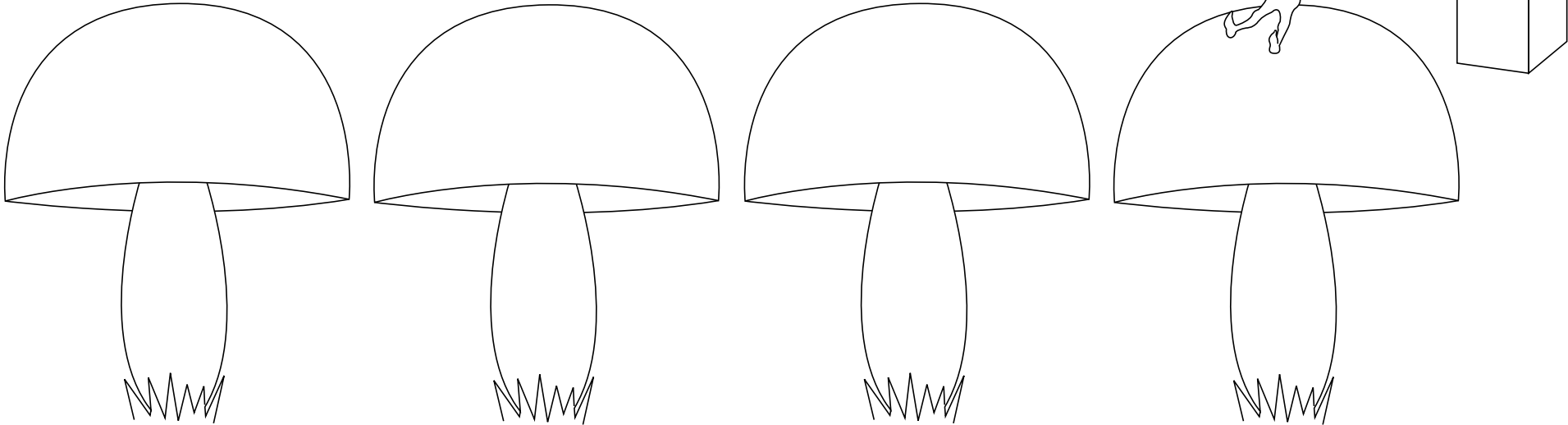


_____ big circles



_____ circles altogether

The Toadstool Game



The Ladybird Game

