



## 5 Decimals: Money – 2

Do not use a calculator.

Work out the change from a £5 note if you spend the following amounts:

- |    |       |            |                          |
|----|-------|------------|--------------------------|
| 1  | 24p   | 1 £ .....  | <input type="checkbox"/> |
| 2  | 72p   | 2 £ .....  | <input type="checkbox"/> |
| 3  | 6p    | 3 £ .....  | <input type="checkbox"/> |
| 4  | £2.21 | 4 £ .....  | <input type="checkbox"/> |
| 5  | £3.20 | 5 £ .....  | <input type="checkbox"/> |
| 6  | £4    | 6 £ .....  | <input type="checkbox"/> |
| 7  | £1.27 | 7 £ .....  | <input type="checkbox"/> |
| 8  | £2.98 | 8 £ .....  | <input type="checkbox"/> |
| 9  | £4.29 | 9 £ .....  | <input type="checkbox"/> |
| 10 | £2.30 | 10 £ ..... | <input type="checkbox"/> |

Work out the change from a £1 coin if you spend the following amounts:

- |    |       |            |                          |
|----|-------|------------|--------------------------|
| 11 | 27p   | 11 £ ..... | <input type="checkbox"/> |
| 12 | 36p   | 12 £ ..... | <input type="checkbox"/> |
| 13 | 70p   | 13 £ ..... | <input type="checkbox"/> |
| 14 | £0.38 | 14 £ ..... | <input type="checkbox"/> |
| 15 | £0.74 | 15 £ ..... | <input type="checkbox"/> |
| 16 | £0.60 | 16 £ ..... | <input type="checkbox"/> |

Work out the change from a £10 note if you spend the following amounts:

- |    |       |            |                          |
|----|-------|------------|--------------------------|
| 17 | £8.81 | 17 £ ..... | <input type="checkbox"/> |
| 18 | £6.37 | 18 £ ..... | <input type="checkbox"/> |
| 19 | £3.43 | 19 £ ..... | <input type="checkbox"/> |
| 20 | 37p   | 20 £ ..... | <input type="checkbox"/> |

Minimum mark	16	13	10	7	
Circle grade	A	B	C	D	E

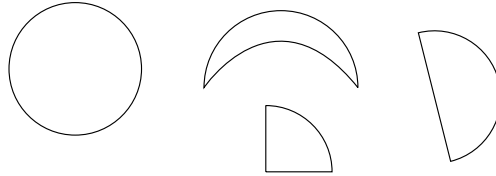
\_\_\_\_\_

20

## 17 2-D and 3-D shapes – 2

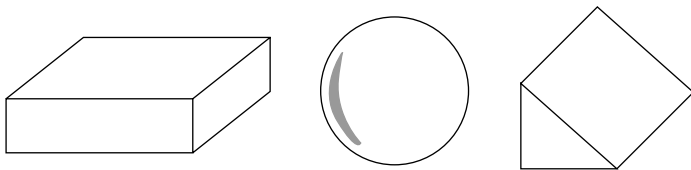


The name of this group of shapes is "Shapes with curves".




Give names to these groups of shapes:

1



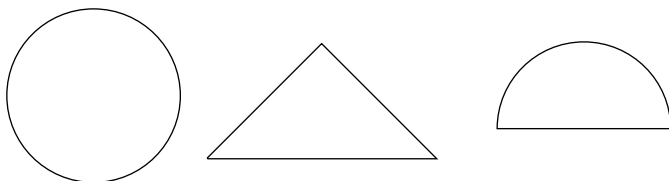
1.....

2




2.....

3



3.....

4



4.....



Minimum mark


Circle grade

4	3	2	1	
A	B	C	D	E

\_\_\_\_\_

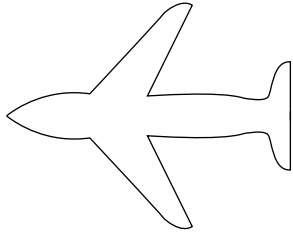
4

# 18 Reflective symmetry – 1




Draw lines of symmetry on these pictures. (Some pictures have more than one line.)

1




2



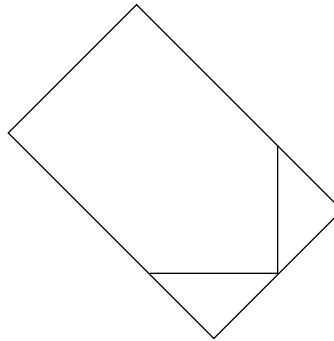
1

2

3




4




3

4

5



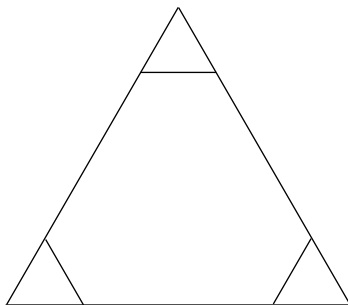
6



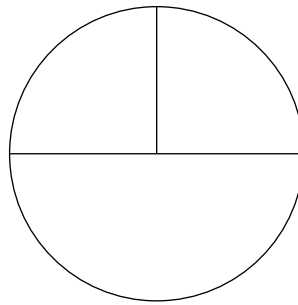
5

6

7



8



7

8



Minimum mark

7	5	4	2	
A	B	C	D	E

Circle grade

\_\_\_\_\_

8

